

The MathLesson

Level 0 Lesson 09 - Learning to add

This lesson contains 19 worksheets. Each sheet has 6 to 12 problems. Print the worksheet and have child do just one worksheet per day. Repeat each worksheet once so that child is doing the same sheets two days in a row.

www.mathlesson.com

Mountcastle Company

Name

Date

Score




$$\underline{2 + 1 = 3}$$




$$\underline{2 + 2 = 4}$$



$$\underline{2 + 1 = 3}$$



$$\underline{2 + 3 = 5}$$



$$\underline{2 + 4 = 6}$$



$$\underline{2 + 5 = 7}$$

Name _____

Date _____

Score _____

$$1 + 2 =$$

$$1 + 3 =$$

$$1 + 4 =$$

$$1 + 5 =$$

$$1 + 6 =$$

$$1 + 7 =$$

Name

Date

Score

2 ice cream cones + 6 ice cream cones =

2 ice cream cones + 5 ice cream cones =

2 ice cream cones + 4 ice cream cones =

2 ice cream cones + 3 ice cream cones =

2 ice cream cones + 2 ice cream cones =

2 ice cream cones + 1 ice cream cone =

Name _____

Date _____

Score _____

$$1 + 2 =$$

$$2 + 3 =$$

$$1 + 4 =$$

$$2 + 5 =$$


$$1 + 6 =$$

$$2 + 7 =$$


Name _____

Date _____


Score _____




1 ice cream cone + 6 ice cream cones = _____



2 ice cream cones + 7 ice cream cones = _____




3 ice cream cones + 5 ice cream cones = _____



1 ice cream cone + 3 ice cream cones = _____



2 ice cream cones + 4 ice cream cones = _____



3 ice cream cones + 4 ice cream cones = _____

Name _____

Date _____

Score _____

$$\begin{array}{c} \text{Ice cream cones} \\ 2 + 5 = \end{array}$$

$$\begin{array}{c} \text{Ice cream cones} \\ 2 + 4 = \end{array}$$

$$\begin{array}{c} \text{Ice cream cones} \\ 2 + 6 = \end{array}$$

$$\begin{array}{c} \text{Ice cream cones} \\ 2 + 5 = \end{array}$$



$$\begin{array}{c} \text{Ice cream cones} \\ 2 + 6 = \end{array}$$



$$\begin{array}{c} \text{Ice cream cones} \\ 2 + 7 = \end{array}$$



Name


Date



Score



 $+$  $=$

 $+$  $=$

 $+$  $=$

 $+$  $=$



 $+$  $=$



 $+$  $=$



Name _____



Date _____



Score _____



 $+$  $=$

 $+$  $=$

 $+$  $=$

 $+$  $=$

 $+$  $=$

 $+$  $=$

Name

Date

Score

2 ice cream cones + 5 ice cream cones =

3 ice cream cones + 4 ice cream cones =

2 ice cream cones + 5 ice cream cones =

3 ice cream cones + 4 ice cream cones =



2 ice cream cones + 5 ice cream cones =



3 ice cream cones + 4 ice cream cones =

Name _____

Date _____

Score _____

 $+$  $=$

 $+$  $=$

 $+$  $=$

 $+$  $=$

 $+$  $=$



 $+$  $=$

Name

Date

Score

 $+$  $=$

 $+$  $=$

 $+$  $=$

 $+$  $=$

 $+$  $=$

 $+$  $=$

Name

Date

Score

A visual addition problem. On the left, there are four ice cream cones arranged in a 2x2 grid. In the middle is a plus sign. On the right, there are three ice cream cones: one at the top and two below it. To the right of the cones is an equals sign.

A visual addition problem. On the left, there are four ice cream cones arranged in a 2x2 grid. In the middle is a plus sign. On the right, there are three ice cream cones: one at the top and two below it. To the right of the cones is an equals sign.

A visual addition problem. On the left, there are four ice cream cones arranged in a 2x2 grid. In the middle is a plus sign. On the right, there are three ice cream cones: one at the top and two below it. To the right of the cones is an equals sign.

A visual addition problem. On the left, there are four ice cream cones arranged in a 2x2 grid. In the middle is a plus sign. On the right, there are three ice cream cones: one at the top and two below it. To the right of the cones is an equals sign.

A visual addition problem. On the left, there are four ice cream cones arranged in a 2x2 grid. In the middle is a plus sign. On the right, there are three ice cream cones: one at the top and two below it. To the right of the cones is an equals sign.

A visual addition problem. On the left, there are four ice cream cones arranged in a 2x2 grid. In the middle is a plus sign. On the right, there are three ice cream cones: one at the top and two below it. To the right of the cones is an equals sign.

Name

Date

Score

1 2 3 4 5

6 7 8 9 10

11 12 13 14 15

16 17 18 19 20

21 22 23 24 25

Name

Date

Score

1

2

3

4

5

6

7

8

9

11

12

14

15

16

17

18

19

20

21

22

23



24

25



Name

Date



Score



 $+$  $=$

 $+$  $=$

 $+$  $=$

 $+$  $=$



 $+$  $=$



 $+$  $=$



Name



Date



Score



 $+$  $=$

 $+$  $=$

 $+$  $=$

 $+$  $=$

 $+$  $=$

 $+$  $=$

Name _____

Date _____

Score _____

5 ice cream cones + 4 ice cream cones =

5 ice cream cones + 4 ice cream cones =

5 ice cream cones + 4 ice cream cones =

5 ice cream cones + 4 ice cream cones =


5 ice cream cones + 4 ice cream cones =


5 ice cream cones + 4 ice cream cones =


Name _____


Date _____


Score _____














Name

Date

Score

21

27

22

28

23

29

24

30

25

31

26

32
